

C O N T E N T S

GRADE 1

1.	Comparing, Ordering, and Sequencing	2
2.	Numbers 1 to 20	6
3.	Addition	10
4.	Subtraction	14
5.	Numbers to 100	18
6.	More about Addition and Subtraction	22
7.	Money	26
	Midway Test	30
8.	Measurement	36
9.	Shapes.....	42
10.	Solids.....	46
11.	Directions	50
12.	Time	54
13.	Patterning	58
14.	Graphs and Probability	62
	Final Test	66
	Assessment Test I	73
	Assessment Test II	81
	Answers	87

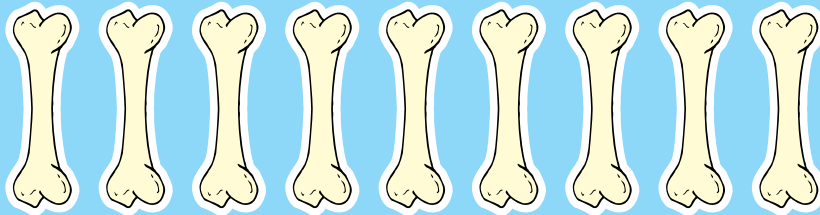
4

Subtraction

Cross out **X** the bones. Then write how many bones are left.

①

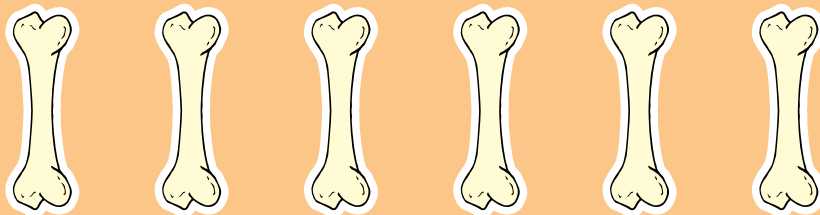
Cross out 7.



 are left.

②



Cross out 1.



 are left.


Count and write the numbers.

③

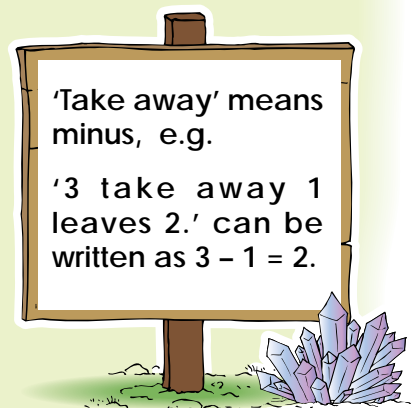


take away leaves
 - =

④




minus equals
 - =



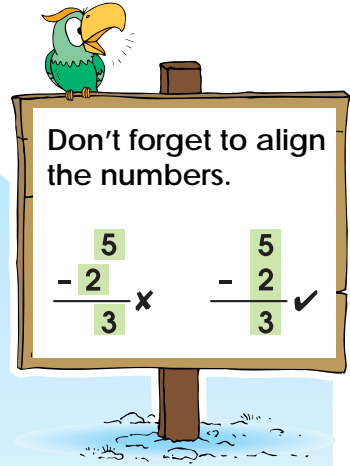
How many fish are left?



$$8 - 5 = \square$$

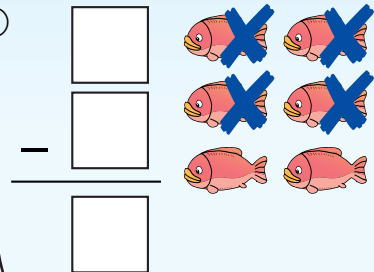


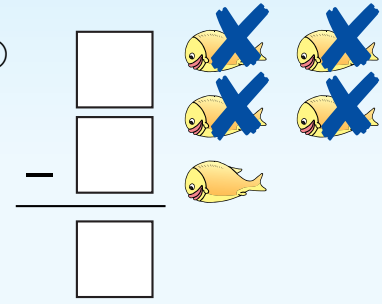
$$\square - \square = \square$$



Don't forget to align the numbers.

$$\begin{array}{r} 5 \\ - 2 \\ \hline 3 \end{array} \times \quad \begin{array}{r} 5 \\ - 2 \\ \hline 3 \end{array} \checkmark$$


⑦ 

⑧ 

Do these.

⑨
$$\begin{array}{r} 3 \\ - 1 \\ \hline \square \end{array}$$

⑩
$$\begin{array}{r} 4 \\ - 2 \\ \hline \square \end{array}$$

⑪
$$\begin{array}{r} 7 \\ - 6 \\ \hline \square \end{array}$$

⑫
$$\begin{array}{r} 5 \\ - 2 \\ \hline \square \end{array}$$

⑬ $8 - 2 = \square$

⑭ $9 - 3 = \square$

⑮ $9 - 4 = \square$

⑯ $6 - 5 = \square$